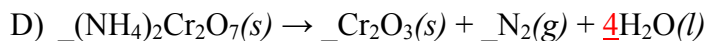
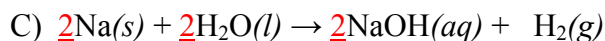
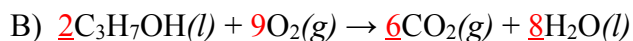
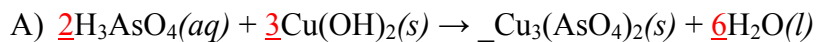


Practice Major Quiz 2 **KEY**

1. Balance the following equations:



2. Give a reaction type classification (combination, decomposition, single replacement, double replacement, or combustion) for each of the reactions in Question 1.

A) double replacement _____

B) combustion _____

C) single replacement _____

D) decomposition _____

E) combination _____

3. Complete each of the following reaction equations, showing correct formulas for the predicted products.

