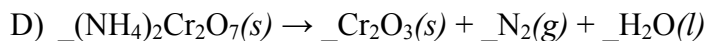
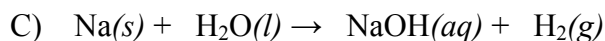
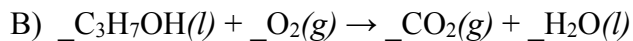
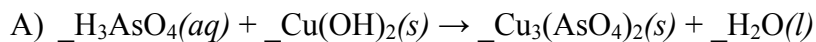


Practice Major Quiz 2

1. Balance the following equations:



2. Give a reaction type classification (combination, decomposition, single replacement, double replacement, or combustion) for each of the reactions in Question 1.

A) _____

B) _____

C) _____

D) _____

E) _____

3. Complete each of the following reaction equations, showing correct formulas for the predicted products.

